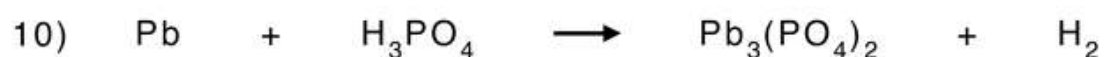
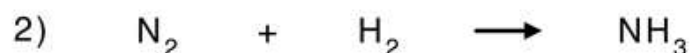



Name : \_\_\_\_\_

Score : \_\_\_\_\_ Date : \_\_\_\_\_

## Chemical Reactions

A. Balance the following chemical reactions:



B. Identify the type of reaction as synthesis, decomposition, single-replacement, double-replacement, and combustion:

