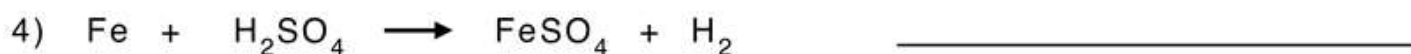
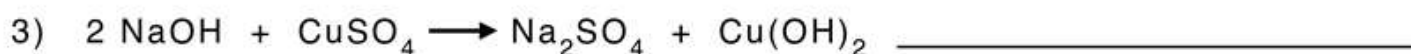

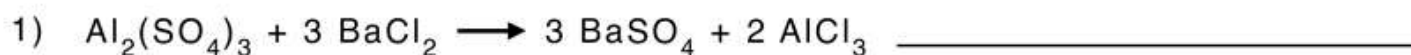


Name: _____

Score: _____ Date: _____

Classifying Chemical Reactions

A. Classify the following reaction as synthesis, decomposition, single-replacement, double-replacement, and combustion:



B. Balance the following equations and indicate the type of reaction:

