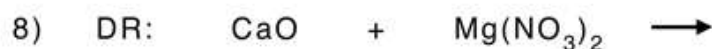


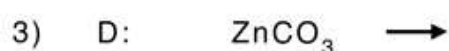
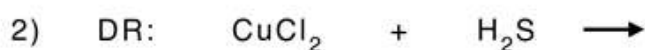
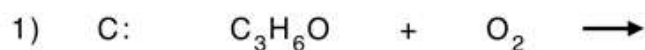


Name: _____

Score: _____ Date: _____

Predicting Products of Chemical Reactions

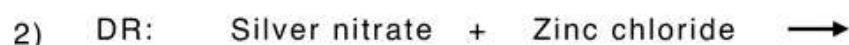
A. Predict the products in the following reactions that have been labeled as synthesis (S), decomposition (D), single-replacement (SR) double-replacement (DR), and combustion (C). Balance the equations.



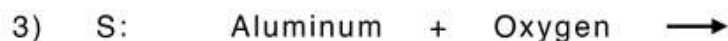
B. Predict the products in the following reactions. Write down the equations and balance them.



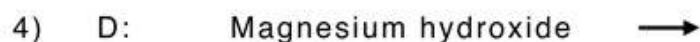
Ans.:



Ans.:



Ans.:



Ans.:



Ans.:



Ans.: