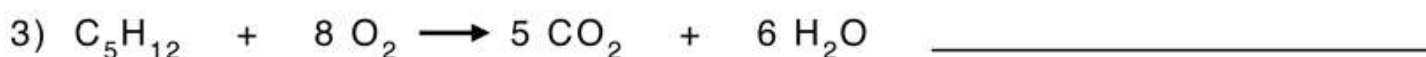
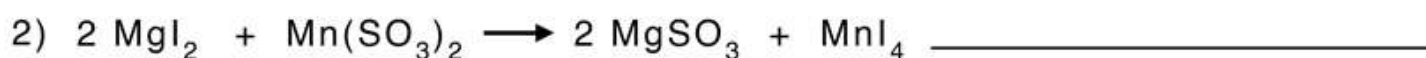
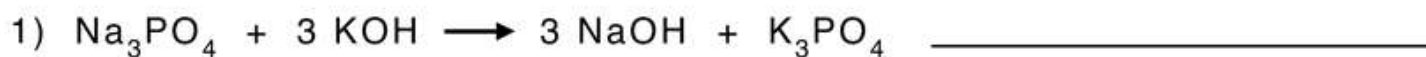


Name: _____

Score: _____ Date: _____

Types of Chemical Reactions

A. Indicate the type of chemical reaction as synthesis, decomposition, single-replacement, double-replacement, and combustion:



B. Balance the following chemical reactions and indicate their types:

