

Name: _____

Score: _____ Date: _____

Balancing Equations: Ionic and Net Ionic Forms

Balance the following equations. Write their ionic and net ionic forms.



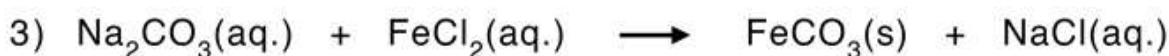
Ionic equation:

Net ionic equation:



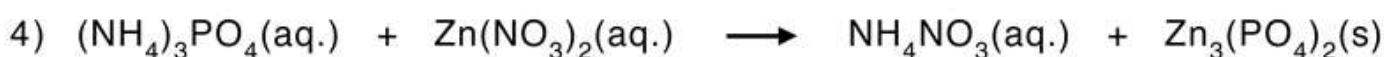
Ionic:

Net ionic:



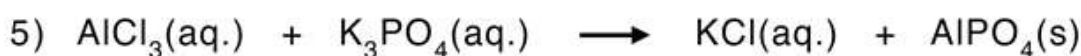
Ionic:

Net ionic:



Ionic:

Net ionic:



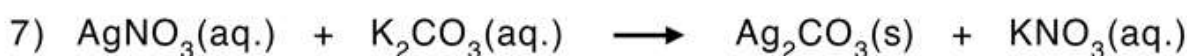
Ionic:

Net ionic:



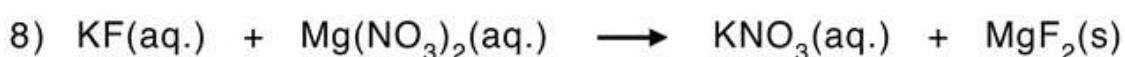
Ionic:

Net ionic:



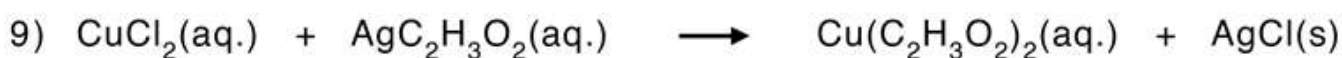
Ionic:

Net ionic:



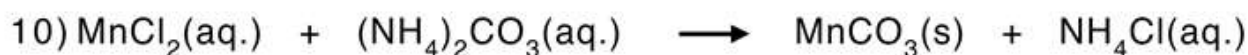
Ionic:

Net ionic:



Ionic:

Net ionic:



Ionic:

Net ionic: