

Name : _____ Date : _____

Periodic Table Elements

Example:

74 — Atomic Number
W — Symbol
Tungsten — Name
Category — Metal

Using your knowledge of the Periodic Table, fill in the missing information about the elements. Indicate the category to which the elements belong. An example has been shown.

Gold

Co

32

I

18

B

47

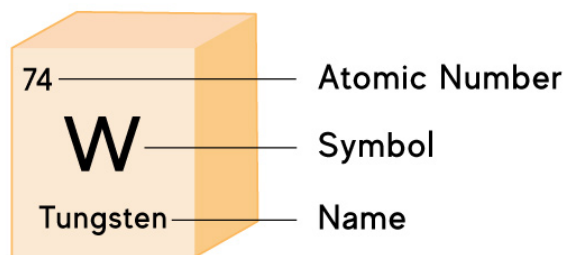
Chlorine

Si

Name : _____ Date : _____

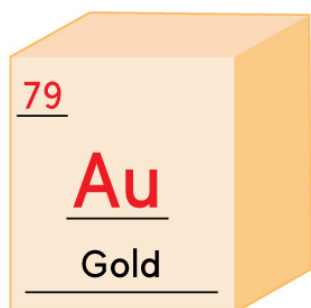
Periodic Table Elements

Example:

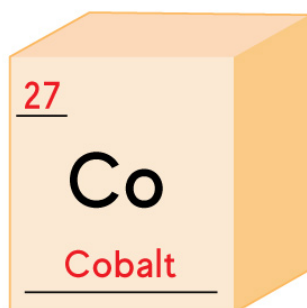


Category — Metal

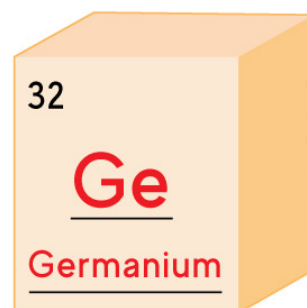
Answers



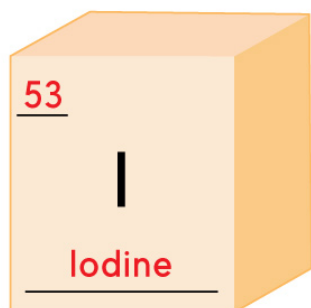
Metal



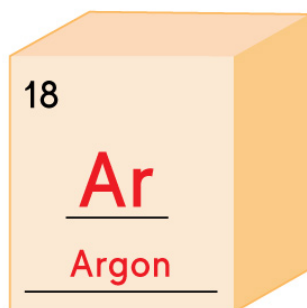
Metal



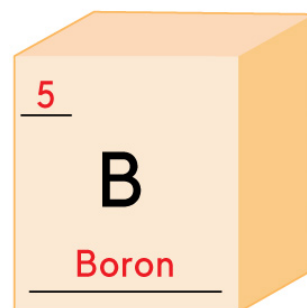
Metalloid



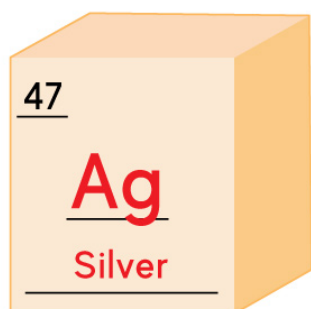
Nonmetal



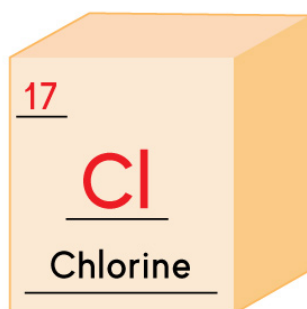
Nonmetal



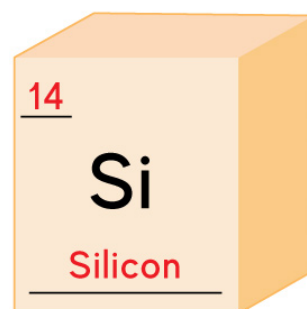
Metalloid



Metal



Nonmetal



Metalloid