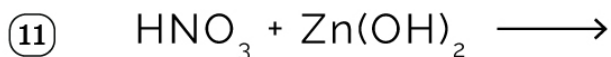
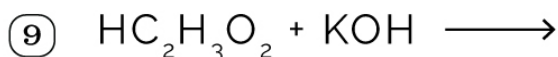
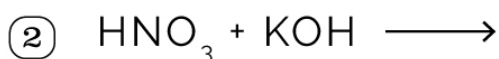


Name : _____

Date : _____

Acids, Bases, and Neutralization

Complete and balance the following neutralization reactions.



Name : _____

Date : _____

Acids, Bases, and Neutralization

Answers

