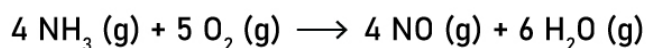


Hess's Law Worksheet

1 Calculate ΔH for the following reaction from the given data.



2 Find the ΔH for the reaction below, given the following reactions and subsequent ΔH values.



3 Calculate the ΔH for the reaction:




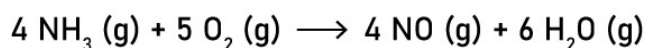
Given the following information:



Hess's Law Worksheet

Answers

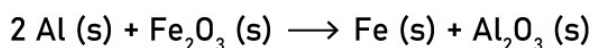
① Calculate ΔH for the following reaction from the given data.



② Find the ΔH for the reaction below, given the following reactions and subsequent ΔH values.



③ Calculate the ΔH for the reaction:



Given the following information:

