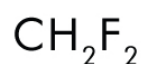
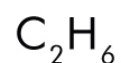
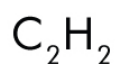
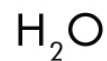


Drawing Lewis Structure

Draw the Lewis structure of the following compounds.



Drawing Lewis Structure

Answers

H₂



HBr



H₂O



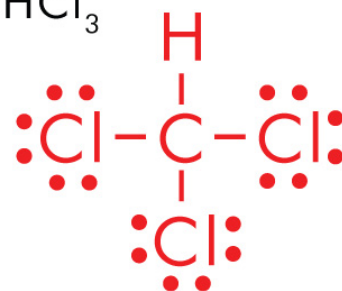
CO₂



O₃



CHCl₃



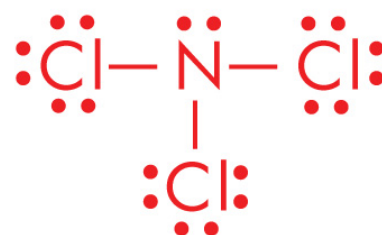
CO



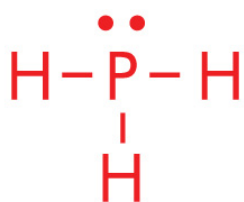
C₂H₂



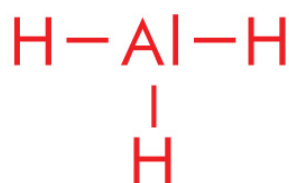
NCl₃



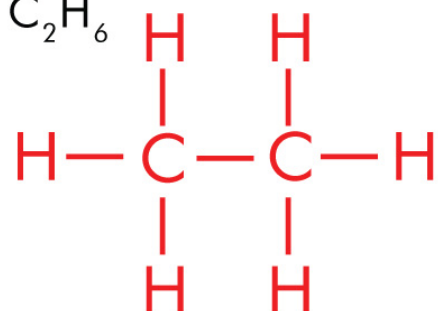
PH₃



AlH₃



C₂H₆



IBr



NI₃



CH₂F₂

