



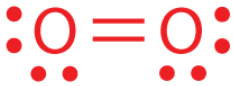



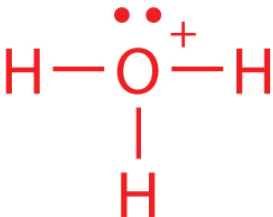
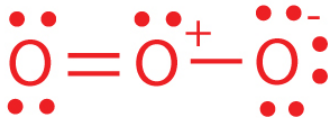
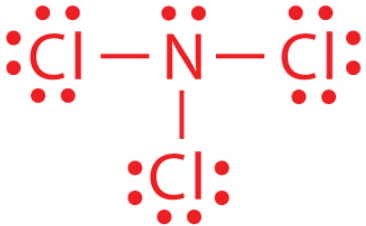

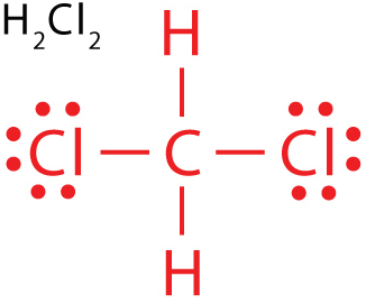
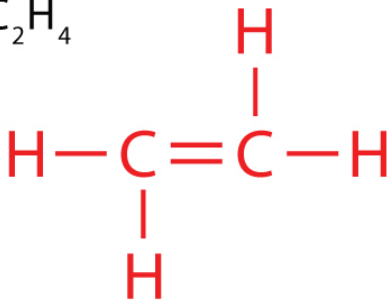
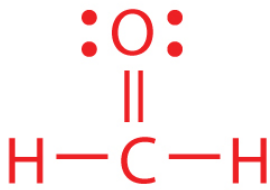
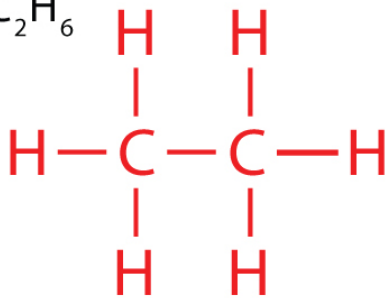
Lewis Dot Diagram Worksheet

Draw the Lewis dot diagram of the following covalent compounds.

F_2	NO	O_2
HCN	H_2S	CO
H_3O^+	O_3	NCl_3
C_2H_2	CH_2Cl_2	C_2H_4
CH_2O	C_2H_6	SO_4^{2-}

Lewis Dot Diagram Worksheet

Answers

F_2 	NO 	O_2 
HCN 	H_2S 	CO 
H_3O^+ 	O_3 	NCl_3 
C_2H_2 	CH_2Cl_2 	C_2H_4 
CH_2O 	C_2H_6 	SO_4^{2-} 