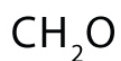
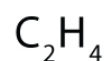
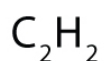
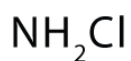
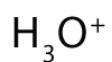


Practicing Lewis Structure

Draw the Lewis structure of the given molecules.



Practicing Lewis Structure

Answers

N_2



NO



CO



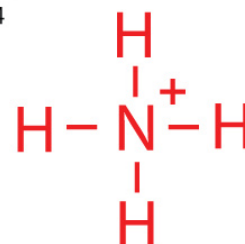
HCN



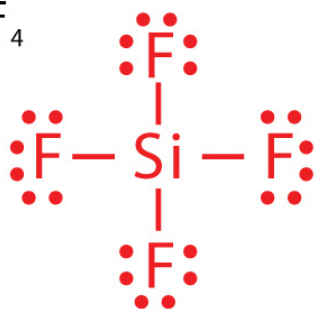
SO_2



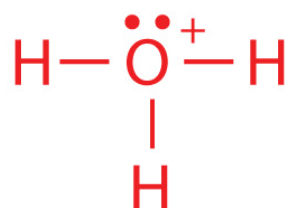
NH_4^+



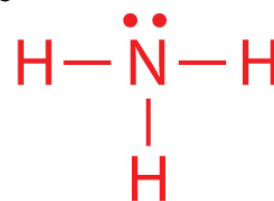
SiF_4



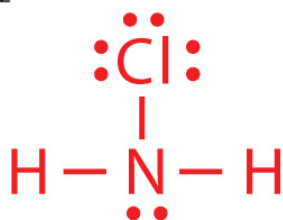
H_3O^+



NH_3



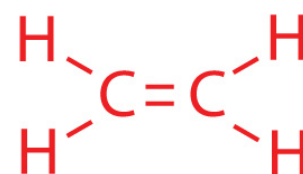
NH_2Cl



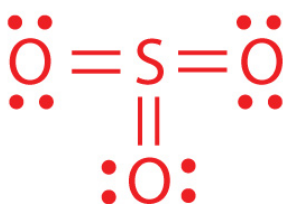
C_2H_2



C_2H_4



SO_3



CH_2O



CCl_4

