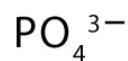
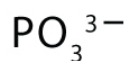
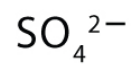
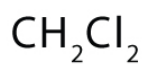
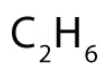
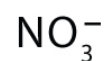


[Lewis Structure Worksheet]

Draw the Lewis structure of the given molecules.



[Lewis Structure Worksheet]

Answers

I_2



HBr



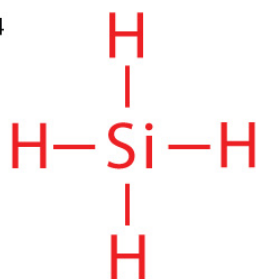
CS_2



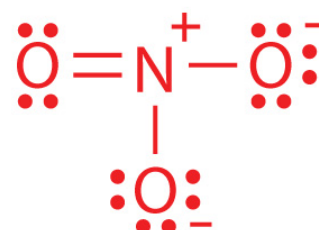
O_3



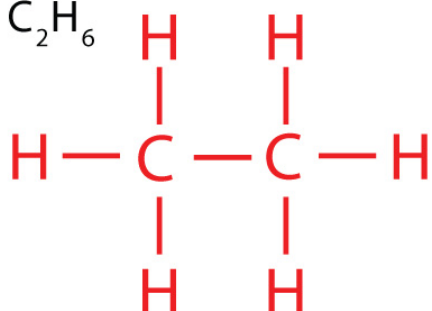
SiH_4



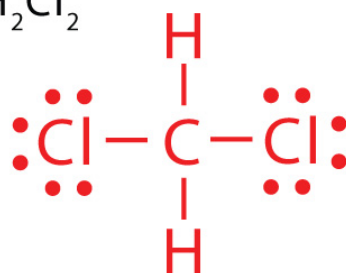
NO_3^-



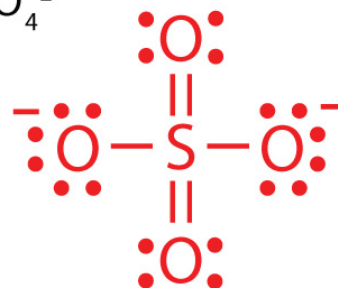
C_2H_6



CH_2Cl_2



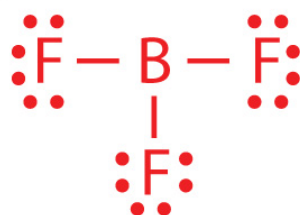
SO_4^{2-}



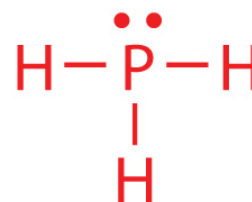
I_3^-



BF_3



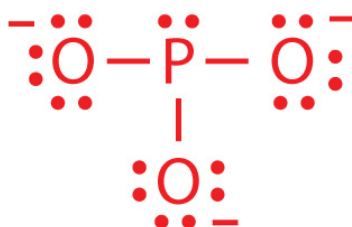
PH_3



OF_2



PO_3^{3-}



PO_4^{3-}

