
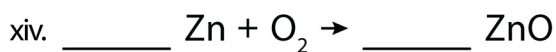
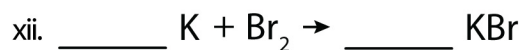
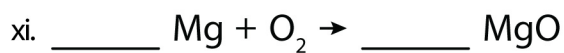
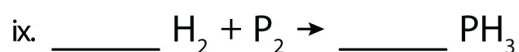

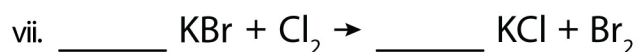
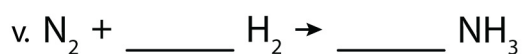
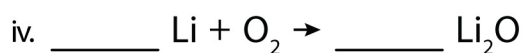



Name : ----- Date : -----

## Balancing Act Practice

Balance the following chemical equations.



Name : ..... Date : .....

## Balancing Act Practice

### Answers

