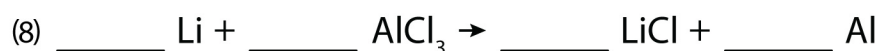
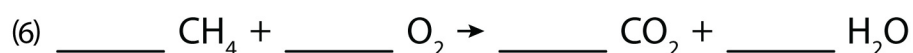
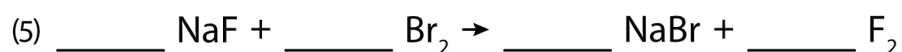
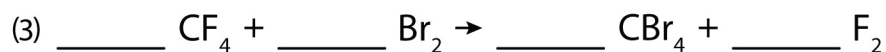



Name : Date :

Balancing Act

Balance the following chemical equations.



Name : Date :

Balancing Act

Answers

