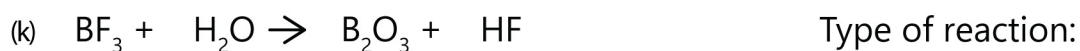
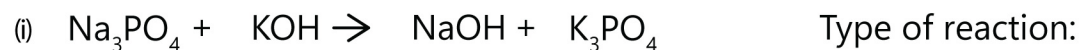
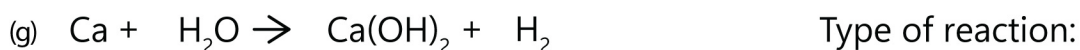

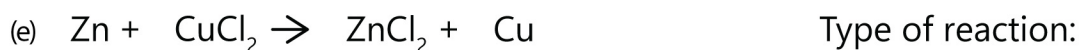


Name : _____ Date : _____

Naming and Balancing Equations

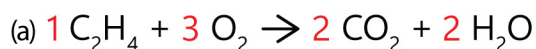
Identify each of the following equations and balance them.



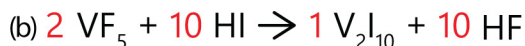
Name : Date :

Naming and Balancing Equations

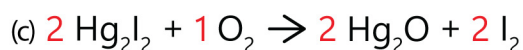
Answers



Type of reaction: **Combustion**



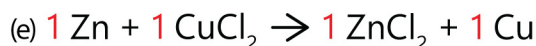
Type of reaction: **Double displacement**



Type of reaction: **Single displacement**



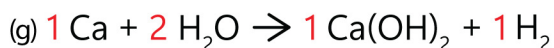
Type of reaction: **Synthesis**



Type of reaction: **Single displacement**



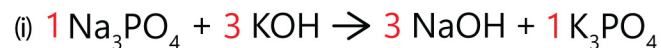
Type of reaction: **Double displacement**



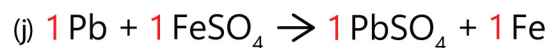
Type of reaction: **Single displacement**



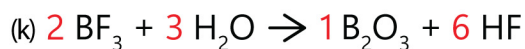
Type of reaction: **Decomposition**



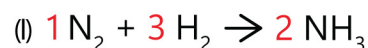
Type of reaction: **Double displacement**



Type of reaction: **Single displacement**



Type of reaction: **Double displacement**



Type of reaction: **Synthesis**