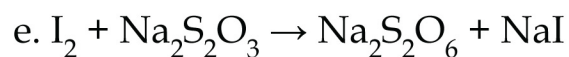
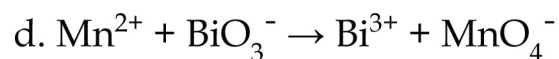
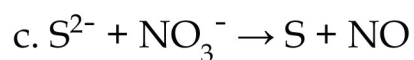
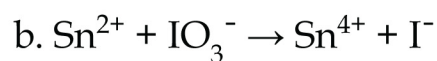
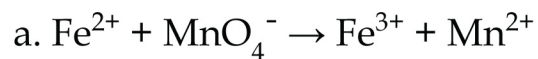


Name : _____ Date : _____

Redox Half Reactions Worksheet

Complete and balance the following reactions using the half-reaction method.



Name : _____ Date : _____

Redox Half Reactions Worksheet

Answers

