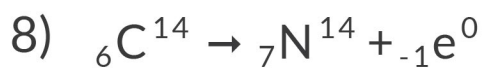
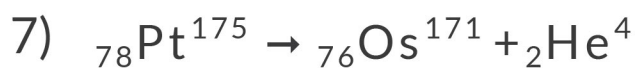
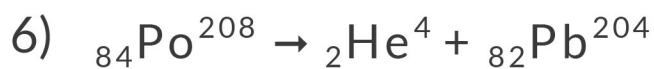
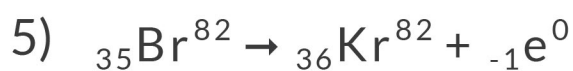
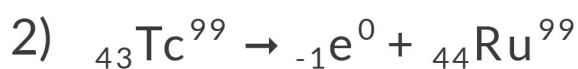
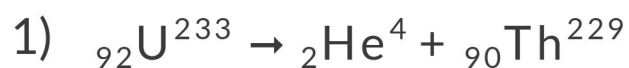


RADIOACTIVE DECAY

☢ Practice Worksheet ☢

Identify the following equations as alpha, beta, or gamma decay examples.



RADIOACTIVE DECAY

Practice Worksheet

Answers

