

ORGANIC COMPOUNDS PRACTICE WORKSHEET



Name : _____

Date : _____

1. Draw the structural formulas of the following organic compounds.

a. Butanoic Acid

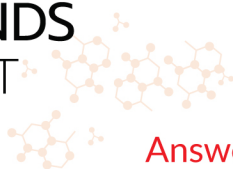
b. Trimethylamine

c. 2-methyl-2-propanol

d. 1- chloro, 4-iodobenzene

e. 1,1 dichloro-2,2-difluoroethane

ORGANIC COMPOUNDS PRACTICE WORKSHEET



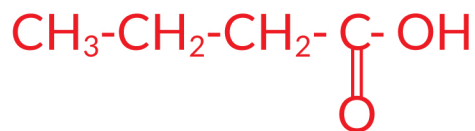
Answers

Name : _____

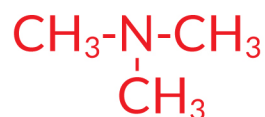
Date : _____

1. Draw the structural formulas of the following organic compounds.

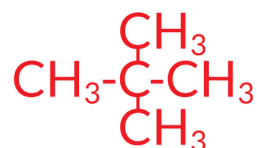
a. Butanoic Acid



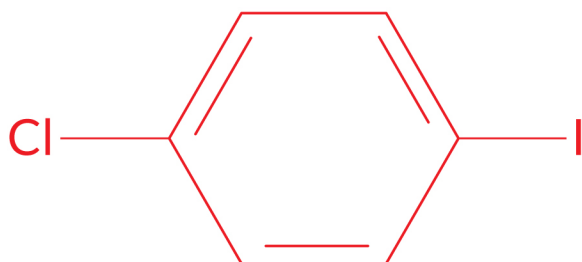
b. Trimethylamine



c. 2-methyl-2-propanol



d. 1-chloro, 4-iodobenzene



e. 1,1-dichloro-2,2-difluoroethane

