

Name : \_\_\_\_\_ Score : \_\_\_\_\_ Date : \_\_\_\_\_

# Organic Compounds Worksheet

Draw the structural formula of the following organic compounds.

1. Pentane

2. m-bromophenol

3. 2-ethyl-1-pentanol

4. Iodobenzene

5. p-bromotoluene

# Organic Compounds Worksheet

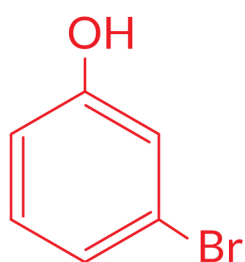
## Answers

Draw the structural formula of the following organic compounds.

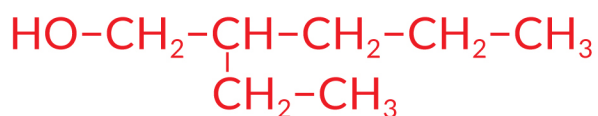
1. Pentane



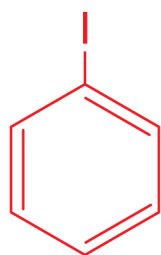
2. m-bromophenol



3. 2-ethyl-1-pentanol



4. Iodobenzene



5. p-bromotoluene

